














## L'AQUARIUM





Voici l'aquarium de l'école.



A	
	2
	2
	2
	1

B	
	3
	1
	2
	3

C	
	1
	3
	3
	2

D	
	3
	2
	3
	2

Quel tableau ( A, B, C ou D) correspond à l'aquarium de l'école ?