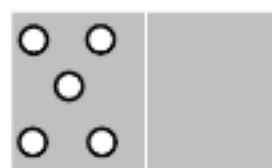
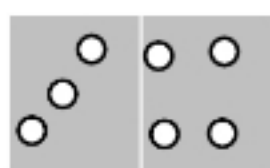
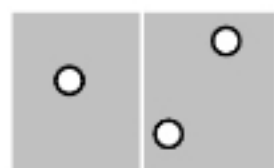
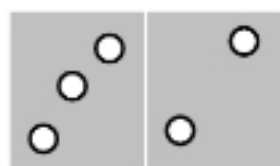



PROBLEME 5



Essayez de ranger les 5 dominos dans le carré magique.

Attention, chaque ligne et chaque colonne doivent faire 12 points.

